

【1】

年

クラス 氏名

点

つぎの 計算を しましょう。

$$\begin{array}{r} (1) \quad 59 \\ + 37 \\ \hline \end{array}$$

$$\begin{array}{r} (2) \quad 15 \\ + 37 \\ \hline \end{array}$$

$$\begin{array}{r} (3) \quad 36 \\ + 58 \\ \hline \end{array}$$

$$\begin{array}{r} (4) \quad 19 \\ + 41 \\ \hline \end{array}$$

$$\begin{array}{r} (5) \quad 18 \\ + 62 \\ \hline \end{array}$$

$$\begin{array}{r} (6) \quad 87 \\ + 4 \\ \hline \end{array}$$

$$\begin{array}{r} (7) \quad 8 \\ + 33 \\ \hline \end{array}$$

$$\begin{array}{r} (8) \quad 66 \\ + 14 \\ \hline \end{array}$$

$$\begin{array}{r} (9) \quad 29 \\ + 28 \\ \hline \end{array}$$

(1)	
(2)	
(3)	
(4)	
(5)	
(6)	
(7)	
(8)	
(9)	

【2】

つぎの 計算を しましょう。

$$\begin{array}{r} (1) \quad 42 \\ - 26 \\ \hline \end{array}$$

$$\begin{array}{r} (2) \quad 83 \\ - 45 \\ \hline \end{array}$$

$$\begin{array}{r} (3) \quad 53 \\ - 29 \\ \hline \end{array}$$

$$\begin{array}{r} (4) \quad 70 \\ - 45 \\ \hline \end{array}$$

$$\begin{array}{r} (5) \quad 72 \\ - \quad 6 \\ \hline \end{array}$$

$$\begin{array}{r} (6) \quad 26 \\ - \quad 9 \\ \hline \end{array}$$

$$\begin{array}{r} (7) \quad 40 \\ - 29 \\ \hline \end{array}$$


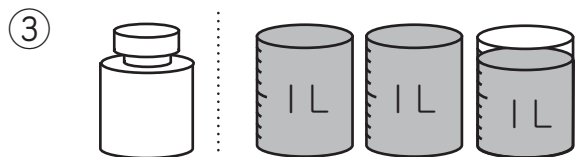
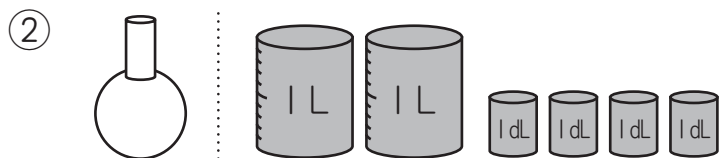
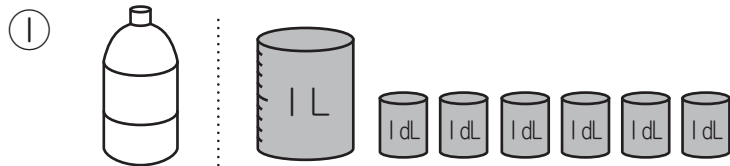
$$\begin{array}{r} (8) \quad 35 \\ - 26 \\ \hline \end{array}$$

$$\begin{array}{r} (9) \quad 55 \\ - 27 \\ \hline \end{array}$$

(1)	
(2)	
(3)	
(4)	
(5)	
(6)	
(7)	
(8)	
(9)	

【3】

(1) つぎの かさは、何L何dLですか。



(1)	①	
	②	
	③	
	④	

(2) つぎの に あてはまる 数を かきましょう。

① $5 \text{ L} = \text{ } \text{dL}$

② $7 \text{ L} = \text{ } \text{dL}$

③ $36 \text{ dL} = \text{ } \text{ L } \text{ } \text{dL}$

④ $42 \text{ dL} = \text{ } \text{ L } \text{ } \text{dL}$

(2)	①		
	②		
	③		
	④		